

Homework - Year 2

Given: 27.4.26 Due: 5.5.26



Maths

Arithmetic:

$$\underline{\hspace{2cm}} + 2 = 9 \quad 12 - \underline{\hspace{2cm}} = 7$$

$$17 = 19 - \underline{\hspace{2cm}} \quad 8 = \underline{\hspace{2cm}} + 5$$

$$\underline{\hspace{2cm}} + 3 = 16 \quad 19 - \underline{\hspace{2cm}} = 14$$

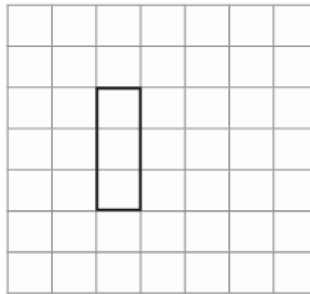
$$15 = 18 - \underline{\hspace{2cm}} \quad 9 = \underline{\hspace{2cm}} + 2$$

$$\underline{\hspace{2cm}} + 13 = 13 \quad 14 - \underline{\hspace{2cm}} = 5$$

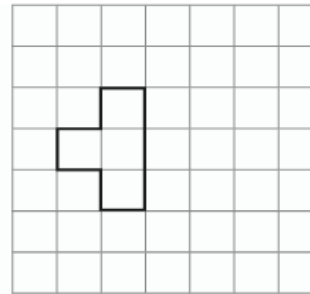
This week's learning:

Only $\frac{1}{2}$ of each shape has been drawn.
Draw the missing half to make the whole.

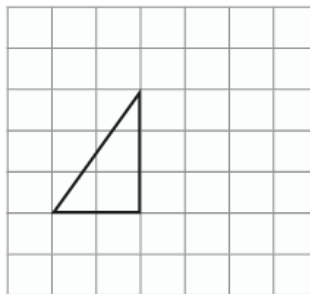
a)



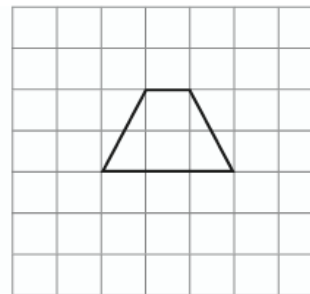
c)



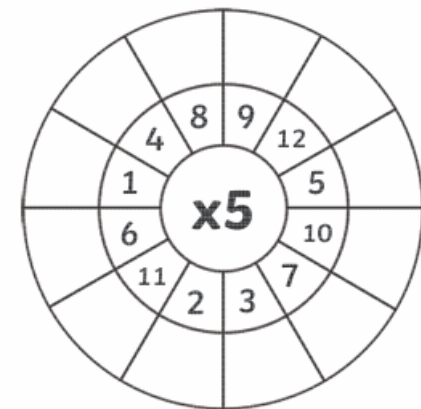
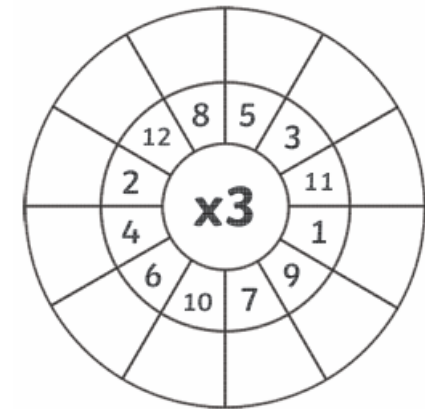
b)



d)



Practise makes perfect:





English

SPAG:

Draw four lines to name the types of sentences.

How many trees are there?

There are lots of trees in the rainforest.

Don't cut down the trees.

How fantastic it is to visit the rainforest today!



- question
- exclamation
- statement
- command

a

Circle the correct homophone for each picture.



deer / dear



deer / dear


Write the correct spellings:



b

Early Life

The King was born at Buckingham Palace on 14th November 1948. He is the oldest child of Queen Elizabeth II and her husband, Prince Philip. He was known as Prince Charles and was given the title The Prince of Wales before he was King.



Family Life

Prince Charles married Lady Diana Spencer on 29th July 1981. The Prince and Princess of Wales were very popular. They had two sons together called Prince William and Prince Harry. They separated in 1992.



Questions

1. What does King Charles III have on his Highgrove estate? Tick one.
 - a cafe
 - a farm
 - a shop
2. Where was King Charles III born? Tick one.
 - Windsor Castle
 - Highgrove
 - Buckingham Palace
3. Circle the word that tells you that King Charles III is older than his brothers and sister.

He is the oldest child of Queen Elizabeth II and her husband, Prince Philip.